

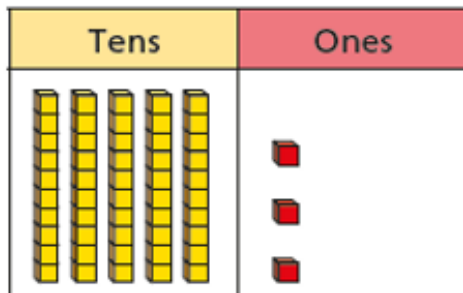
20/01/21



LI: Recognise the value of digits

Complete the sentences.

a)



There are tens

and ones.

The number represented is

b)





There are tens



and ones.

The number represented is

Complete the place value charts to represent the number 47

Tens	Ones
	

Tens	Ones
	7

Tens	Ones
	

Tens	Ones
	