

Years, months, weeks and days


1 Sort the months into the table.

January	April	July	October
February	May	August	November
March	June	September	December

Less than 30 days	30 days	31 days


2

2020 is a leap year.



a) How many days will there be in 2020?

days




There will be 366 days in the year 2040

b) Do you agree with Whitney? _____

Explain your answer.

3



2 months is the same as 61 days.

Is this always true, sometimes true or never true?

Tick your answer.

☐ always true

☐ sometimes true

☐ never true

Prove your answer.

4

Write <, > or = to complete the statements.

1 week 7 days

15 days 2 weeks

15 days 1 month

360 days 1 year

360 weeks 1 year

12 months 1 year

20 months 2 years

40 months 3 years



5 Complete the tables.


Weeks	Days	Days	Weeks
2			1
4			3
8			10
80			9
40			13
28			36

6

September						
M	T	W	Th	F	Sa	Su
		1	2	3	4	5
6	7	8	9	10	11	12
13	14	15	16	17	18	19
20	21	22	23	24	25	26
27	28	29	30			

a)

Jack




My birthday is on the third Friday of September.

When is Jack's birthday?

Date: Month

b)

Amir



My birthday is on the same date as Jack's but in August.

When is Amir's birthday?

Date: Month

7 Tim is three times as old as Anna.
George is 4 months older than Anna.
Anna is 2 years and 2 months old.
What is their combined age?

years months

8 Jack, Annie and Alex went for a run together on Tuesday 5 January.
Jack ran every 2 days after that.
Alex ran every 3 days after that.

a) How many more times in January will Jack and Alex run together on the same day?

more times

b) Annie only runs on Tuesdays.

When is the next time that all three friends will run together on the same day?